

SAMPLE SLATE QUESTION PAPER

CLASS: 3

SUB: MATHEMATICS

1. Which number is great _____

- a)300+4 b)400+3 c)100+20+5 d)500+100+9

2. Write the time for quarter to 4 _____

- a) 3:25 b) 3:30 c) 3:45 d) 4:15

3. Write the name of 3D Shape that looks like Refrigerator.

- a) Cube b) Cuboid c) Sphere d) Cone

4. I have 200 grams of biscuit packet.

How many Packets of biscuits I need to make a kilogram?



- a)2 b)4 c)5 d)10

5. If my number is 210. Guess how many more to make a triple century?

- a)70 b)80 c)90 d)100

6. 9 times 8 makes _____

- a)8 b)9 c)98 d)72

7. My colour paper is  shape. It has 4 sides and 4 corners. Sunil's colour paper in  this shape. Find how many sides and coroners are in this?

- a)4,4 b)5,5 c)6,6 d)7,7

8) If we add us both, we get 100. The difference between us is also 100. What numbers are we?


a) 1 and 99 b) 2 and 98 c) 55 and 45 d) 0 and 100


9) How many odd numbers are there between 345 to 355.

a) 4 b) 5 c) 6 d) 8

10) Rama bought a doll for Rs 30. Her 5 friends asked her to get for them. How much money did they pay?

a) $30+5$ b) $30-5$ c) 30×5 d) $30/5$

11) One  is equal to 3 birds.

 are equal to _____ birds.

a) 3 b) 6 c) 10 d) 18

12) I need 3 meters of cloth for long kurtha. I should buy _____ cm of cloth.

a) 3 cm b) 13cm c) 30cm d) 300cm

13) 5×6 is multiplication fact. Express into repeated addition.

a) $5+5+5$ b) $5+5+5+5+5$ c) $6+6+6$ d) $6+6+6+6+6$

14) Write the largest 4-digit number using 5,9,1,2.

a) 5912 b) 9125 c) 9215 d) 9521

15) NAMAN is a special name. If you read it backwards it is still the same. Which of the name here the same pattern?

a) MUNNA b) HARSH c) KANAK d) JAGAN

16) A litre bottle is half full with water. How many milliliters of water is there in the bottle?

- a) 1000 ml b) 250 ml c) 500 ml d) 750 ml

17) Sagar had money. How much amount of money should be added to get Rs 500 ?

- a) Rs 200 b) Rs 240 c) Rs 250 d) Rs 260

18) Find the difference of place values of 4 in 442.

- a) 360 b) 440 c) 42 d) 442

19. Ravi has 4 liters of juice. How many glasses of 500 ml can he get?

- a) 2 b) 1 c) 4 d) 5

20. How many Rs 5 stamps can you buy for rupees 10?

- a) 1 b) 2 c) 10 d) 3

21. One row has 10 chairs. How many chairs will be there in 5 such rows?

- a) 50 b) 5 c) 15 d) 25

22. 3 books cost rupees 336. What is the cost of one book?

- a) Rs:121 b) Rs:225 c) Rs:100 d) Rs:112

23. 100 balls are put equally in 10 baskets. How many balls will be there in each basket?

- a) 10 b) 100 c) 1 d) 101

24. The time 2 hours after 9:10 will be _____.

- a) 8:10 b) 11:10 c) 12:10 d) 10:10

25. At 8:30, the minutes' hand of a clock points at _____.

- a) 9 b) 3 c) 6 d) 2

26. Half of 70 is _____.

- a) 20 b) 30 c) 35 d) 45

27. Double of 34 is _____.

- a) 68 b) 35 c) 75 d) 80

28. What number should be added to 25 to get 35?

- a) 5 b) 10 c) 20 d) 30

29. How much is 250 less than 300?

- a) 50 b) 500 c) 15 d) 55

30. The cost of one pen is Rs:15. How much 3 pens will cost?

- a) 35 b) 45 c) 55 d) 25

31. A shop keeper has 218 apples and 336 mangoes. How many fruits does he have in all?

- a) 554 b) 634 c) 112 d) 336

32. Division is repeated _____.

- a) Addition b) Subtraction c) Multiplication d)

Division

33. 9 kg 234 grams is equal to how many grams?

- a) 234 grams b) 9 grams c) 34 grams d) 9234 grams